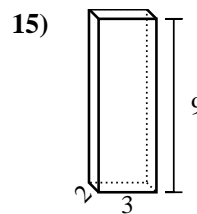
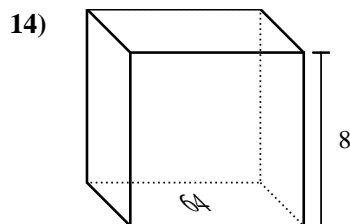
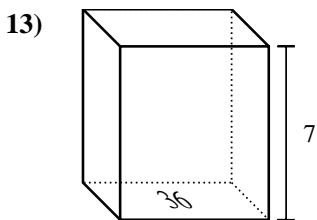
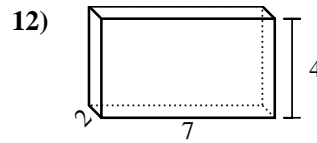
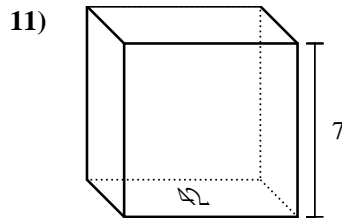
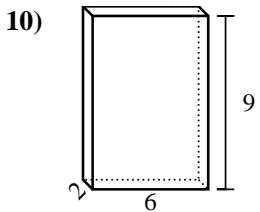
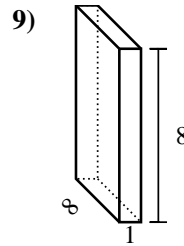
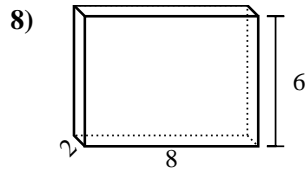
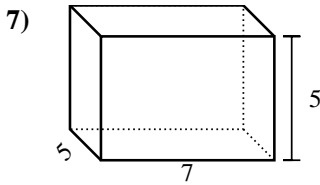
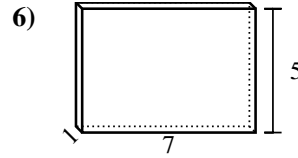
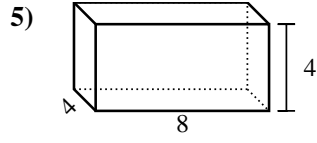
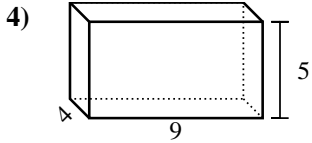
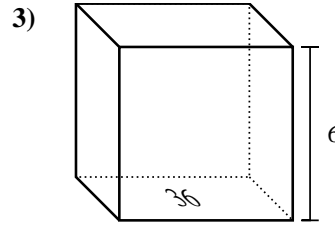
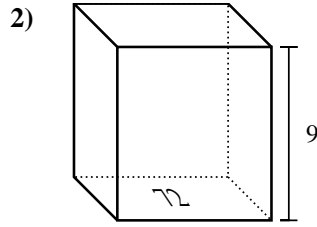
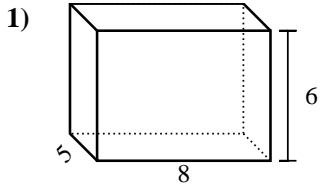




Find the volume of each rectangular prism. Units are in cm (not to scale). Remember $V = BH$ and $V = L \times W \times H$

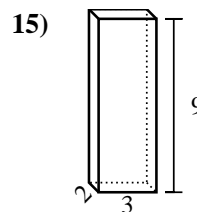
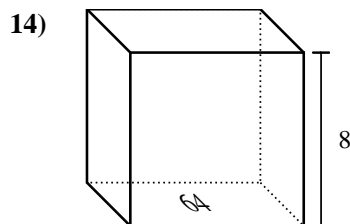
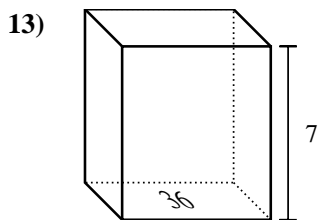
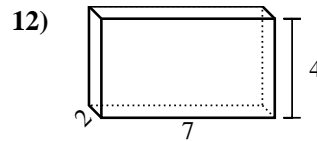
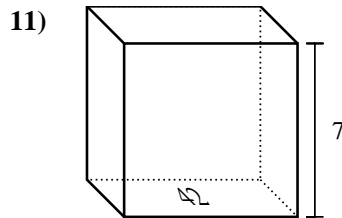
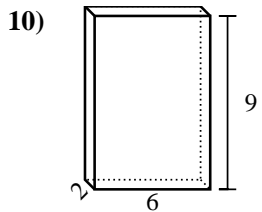
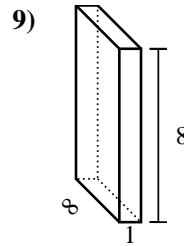
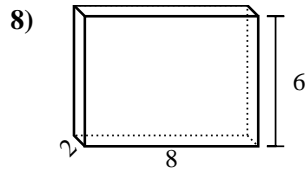
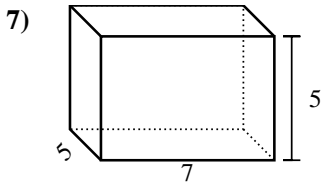
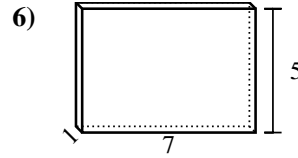
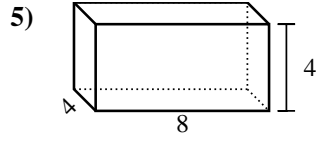
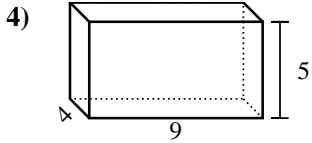
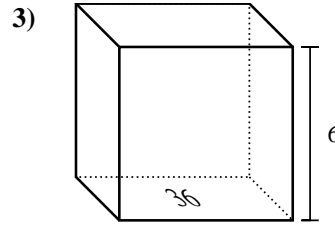
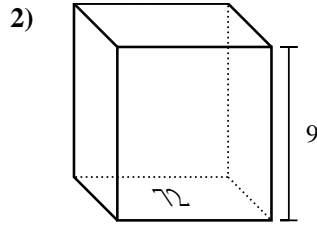
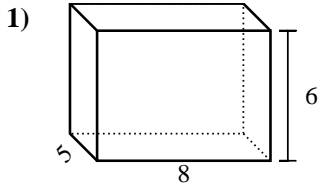
Answers



1. _____
2. _____
3. _____
4. _____
5. _____
6. _____
7. _____
8. _____
9. _____
10. _____
11. _____
12. _____
13. _____
14. _____
15. _____

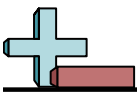


Find the volume of each rectangular prism. Units are in cm (not to scale). Remember $V = BH$ and $V = L \times W \times H$



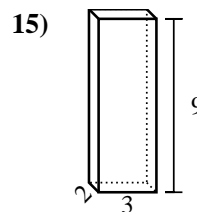
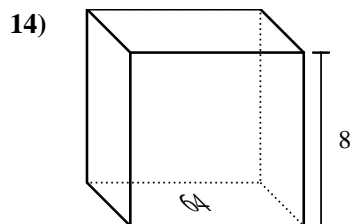
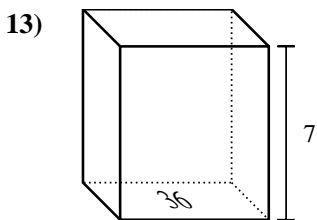
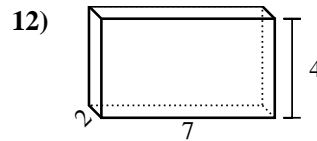
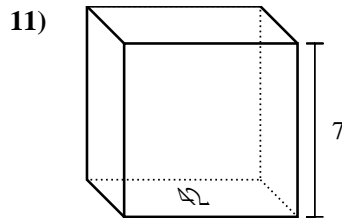
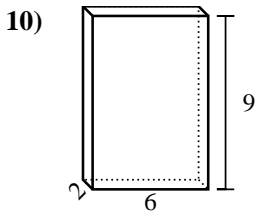
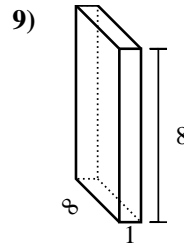
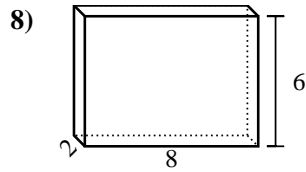
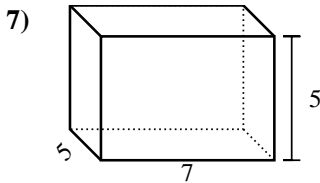
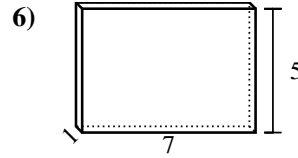
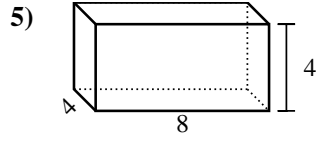
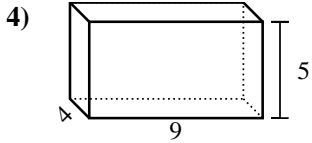
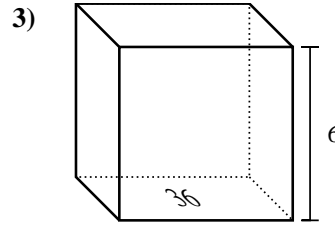
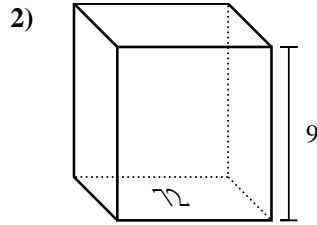
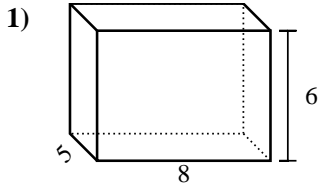
Answers

1. 240 cm³
2. 648 cm³
3. 216 cm³
4. 180 cm³
5. 128 cm³
6. 35 cm³
7. 175 cm³
8. 96 cm³
9. 64 cm³
10. 108 cm³
11. 294 cm³
12. 56 cm³
13. 252 cm³
14. 512 cm³
15. 54 cm³



Find the volume of each rectangular prism. Units are in cm (not to scale). Remember $V = BH$ and $V = L \times W \times H$

Answers



1. _____
2. _____
3. _____
4. _____
5. _____
6. _____
7. _____
8. _____
9. _____
10. _____
11. _____
12. _____
13. _____
14. _____
15. _____